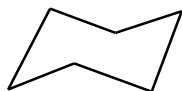


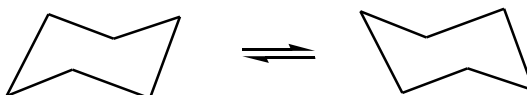
Do not look at answers until you have drawn each structure.

Use back button to see answers

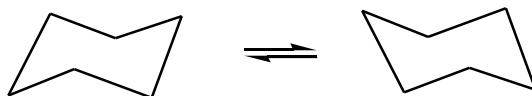
Draw this chair then add the six axial hydrogen atoms



Draw both chairs then add the six equatorial hydrogen atoms



Draw both chairs then add all twelve hydrogen atoms



For each cyclohexane structure, identify each group as axial (a) or equatorial (e)

